

Name: _____

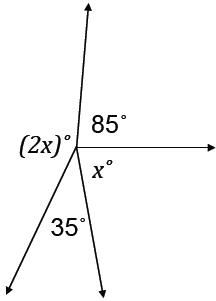
Date: _____

CC Geometry (H)

Angle Pairs Homework

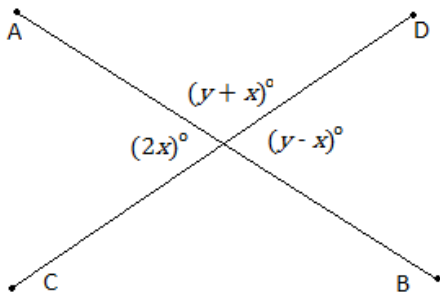
For Exercises 1 – 6, find the values of x and y . Show all work.

1.



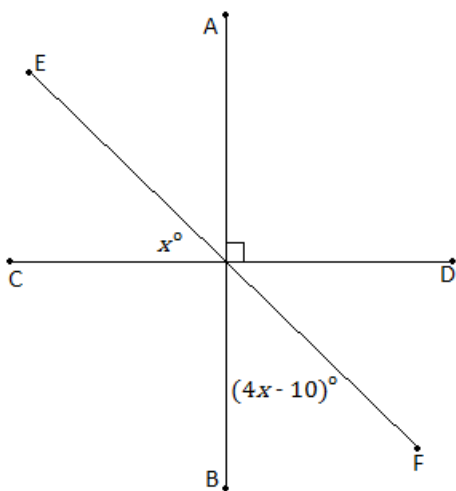
$x =$ _____

2.



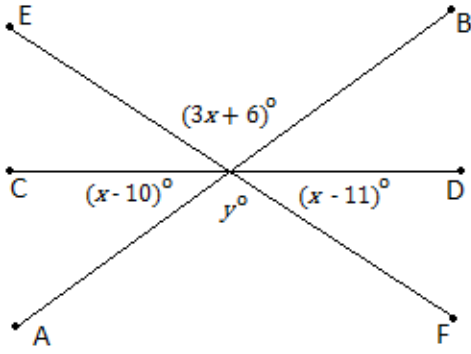
$x =$ _____ $y =$ _____

3.



$x =$ _____

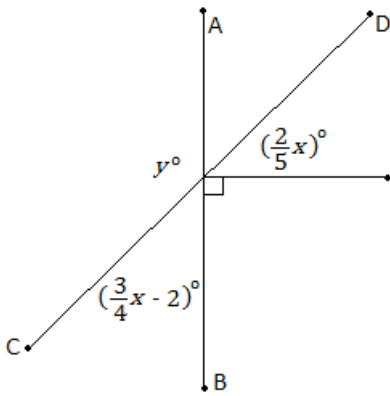
4.



$x =$ _____

$y =$ _____

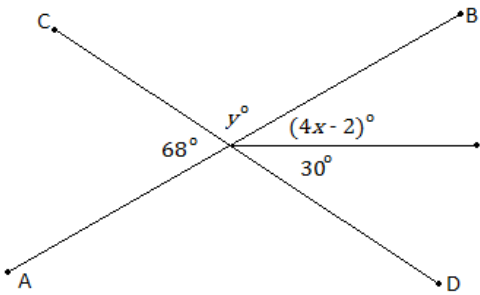
5.



$x =$ _____

$y =$ _____

6.



$x =$ _____

$y =$ _____