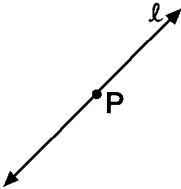



Name: _____
CC Geometry

Constructing Perpendicular and Parallel Lines Homework

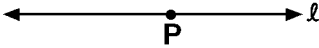
1) Construct a line through P perpendicular to line l below.



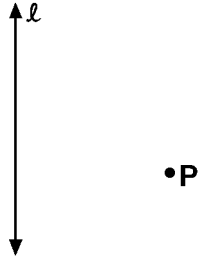
2) Construct a line through A that is parallel to \overline{BC} .



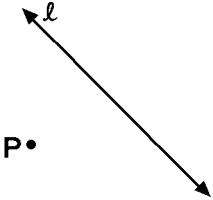
3) Construct a line through P perpendicular to line l below.



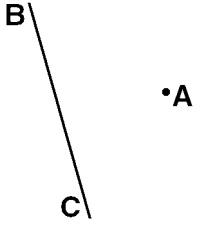
4) Construct a line through P perpendicular to line ℓ below.



5) Construct a line through P perpendicular to line ℓ below.



6) Construct a line through A that is parallel to \overline{BC} .



- 1) Answer is a construction.
- 2) Answer is a construction.
- 3) Answer is a construction.
- 4) Answer is a construction.
- 5) Answer is a construction.
- 6) Answer is a construction.